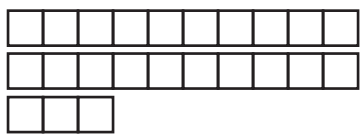

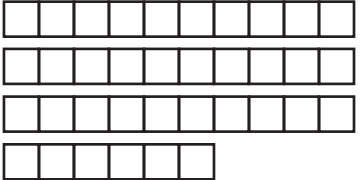
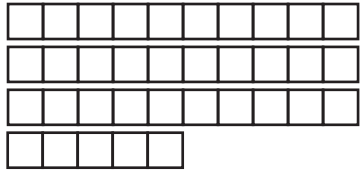







Name \_\_\_\_\_

Write the number of tens and ones below the squares.  
Write  $>$  or  $<$  in the circles to compare numbers.

										
<table border="1" style="margin: auto;"> <tr> <td style="padding: 5px;">tens</td> <td style="padding: 5px;">ones</td> </tr> <tr> <td style="height: 40px;"></td> <td style="height: 40px;"></td> </tr> </table>	tens	ones				<table border="1" style="margin: auto;"> <tr> <td style="padding: 5px;">tens</td> <td style="padding: 5px;">ones</td> </tr> <tr> <td style="height: 40px;"></td> <td style="height: 40px;"></td> </tr> </table>	tens	ones		
tens	ones									
tens	ones									

										
<table border="1" style="margin: auto;"> <tr> <td style="padding: 5px;">tens</td> <td style="padding: 5px;">ones</td> </tr> <tr> <td style="height: 40px;"></td> <td style="height: 40px;"></td> </tr> </table>	tens	ones				<table border="1" style="margin: auto;"> <tr> <td style="padding: 5px;">tens</td> <td style="padding: 5px;">ones</td> </tr> <tr> <td style="height: 40px;"></td> <td style="height: 40px;"></td> </tr> </table>	tens	ones		
tens	ones									
tens	ones									

										
<table border="1" style="margin: auto;"> <tr> <td style="padding: 5px;">tens</td> <td style="padding: 5px;">ones</td> </tr> <tr> <td style="height: 40px;"></td> <td style="height: 40px;"></td> </tr> </table>	tens	ones				<table border="1" style="margin: auto;"> <tr> <td style="padding: 5px;">tens</td> <td style="padding: 5px;">ones</td> </tr> <tr> <td style="height: 40px;"></td> <td style="height: 40px;"></td> </tr> </table>	tens	ones		
tens	ones									
tens	ones									